



THE VILLAGE  
INTERNATIONAL SCHOOL  
"We Nurture Dreams"

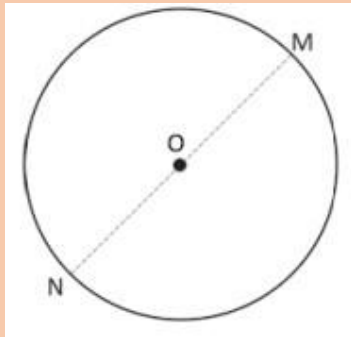
## Question Bank

Grade: 4

Subject: Mathematics

Chapter 1: Geometry


1. Name the centre, radius and diameter of the circle.



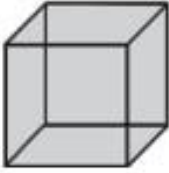

2. Draw lines to cut the objects into their mirror halves.



3. Draw a cone or cube on the dot grid.



4. How many edges, faces and vertices do these 3D shapes have?

1.		Edges: _____ Faces: _____ Vertices: _____	2.		Edges: _____ Faces: _____ Vertices: _____
----	---	---	----	---	---

5. Use a compass and draw circles as given. Mark the centre and the radius.

A. a circle of radius 4 cm.

B. a circle of radius 6 cm and another of radius 3 cm with the same centre.